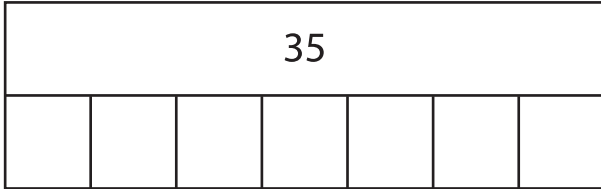


Name : _____

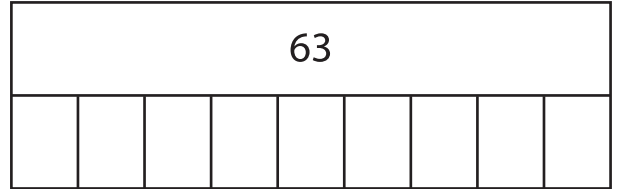
Division - Bar Model

Sheet 2

1) $35 \div 7 =$ _____



2) $63 \div 9 =$ _____



3) $16 \div 2 =$ _____



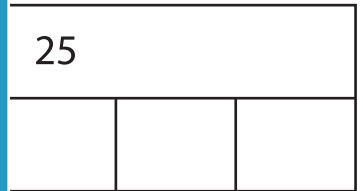
PREVIEW

Gain complete access to the largest collection of worksheets in all subjects!

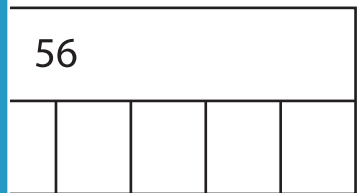

Members, please log in to download this worksheet.

Not a member? Please sign up to gain complete access.

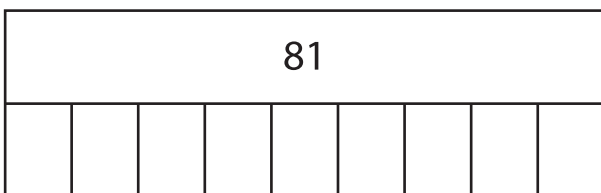
www.mathworksheets4kids.com



5) $24 \div 4 =$ _____



7) $81 \div 9 =$ _____



8) $18 \div 6 =$ _____

