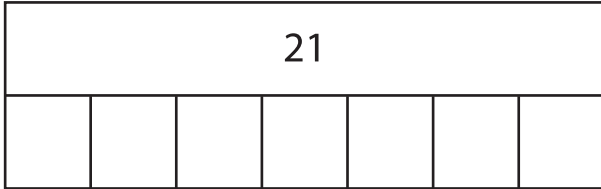


Name : \_\_\_\_\_

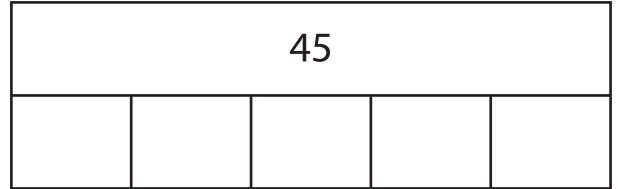
## Division - Bar Model

Sheet 3


1)  $21 \div 7 =$  \_\_\_\_\_



2)  $45 \div 5 =$  \_\_\_\_\_



3)  $28 \div 4 =$  \_\_\_\_\_




**PREVIEW**

Gain complete access to the largest collection of worksheets in all subjects!

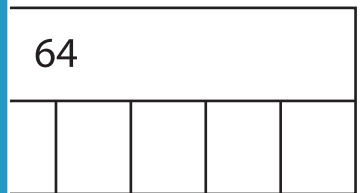

Members, please log in to download this worksheet.

Not a member? Please sign up to gain complete access.

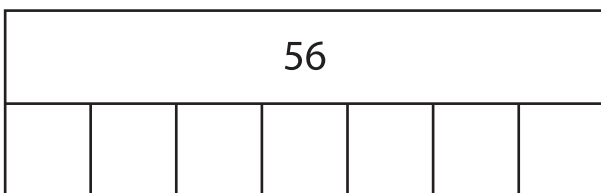
[www.mathworksheets4kids.com](http://www.mathworksheets4kids.com)



5)  $10 \div 2 =$  \_\_\_\_\_



7)  $56 \div 7 =$  \_\_\_\_\_



8)  $12 \div 3 =$  \_\_\_\_\_

