


## Division Models

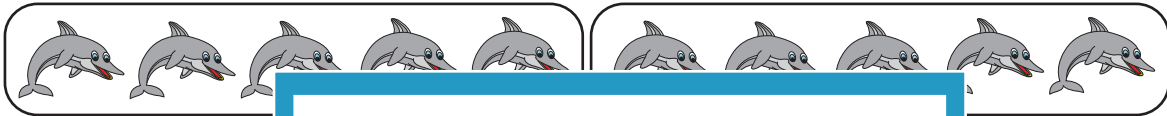
Find the number of groups and complete the division sentences.

1)




$$30 \div 6 = \underline{\hspace{2cm}}$$

2)



10


3)



14

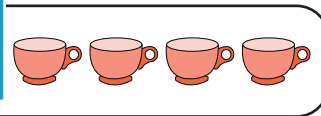



4)



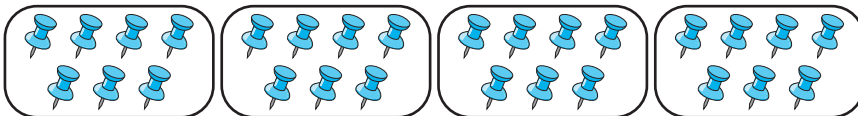
28

5)



$$16 \div 8 = \underline{\hspace{2cm}}$$

6)



$$28 \div 7 = \underline{\hspace{2cm}}$$

# PREVIEW

Gain complete access to the largest collection of worksheets in all subjects!

Members, please log in to download this worksheet.

Not a member? Please sign up to gain complete access.

[www.mathworksheets4kids.com](http://www.mathworksheets4kids.com)