




Division Models

A)



1) How many eggs are there in all?

_____ eggs

2) How many eggs are there in each nest?

_____ eggs



3) How many nests are there?

_____ nests

4) Write a division sentence to describe the model.

_____ ÷ _____ = _____

B)



1) How many flowers are there in all?

_____ flowers

2) How many flowers are there in each flower pot?

_____ flowers

3) How many flower pots are there?

_____ flower pots

4) Write a division sentence to describe the model.

_____ ÷ _____ = _____

PREVIEW

Gain complete access to the largest collection of worksheets in all subjects!

Members, please log in to download this worksheet.

Not a member? Please sign up to gain complete access.

www.mathworksheets4kids.com