


Name : _____

Division Models

Sheet 3

1) Divide into groups of 2.



How many groups are there? _____ ; How many are left over? _____

2) Divide into groups of 3.




How many groups _____ ; How many are left over? _____

3) Divide into groups of 4.



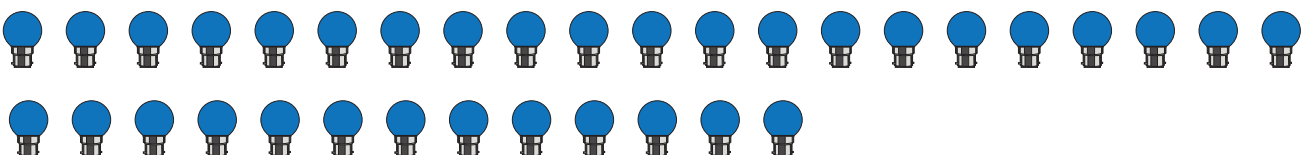
How many groups _____ ; How many are left over? _____

4) Divide into groups of 3.



How many groups are there? _____ ; How many are left over? _____

5) Divide into groups of 7.



How many groups are there? _____ ; How many are left over? _____

PREVIEW

Gain complete access to the largest collection of worksheets in all subjects!

Members, please log in to download this worksheet.

Not a member? Please sign up to gain complete access.

www.mathworksheets4kids.com