

# Division Models


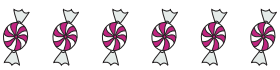
Divide the objects into indicated groups and write the division sentences.

1) Divide into groups of 3.



$$\underline{\hspace{2cm}} \div \underline{\hspace{2cm}} = \underline{\hspace{2cm}}$$

2) Divide into groups of 9.



$$\underline{\hspace{2cm}}$$

3) Divide into groups



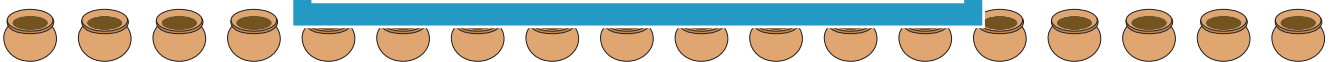
$$\underline{\hspace{2cm}}$$

4) Divide into groups



$$\underline{\hspace{2cm}}$$

5) Divide into groups



$$\underline{\hspace{2cm}} \div \underline{\hspace{2cm}} = \underline{\hspace{2cm}}$$

6) Divide into groups of 2.



$$\underline{\hspace{2cm}} \div \underline{\hspace{2cm}} = \underline{\hspace{2cm}}$$

## PREVIEW

Gain complete access to the largest collection of worksheets in all subjects!

Members, please log in to download this worksheet.

Not a member? Please sign up to gain complete access.

[www.mathworksheets4kids.com](http://www.mathworksheets4kids.com)