


## Division Models

Choose the division equation that describes each model.

1)

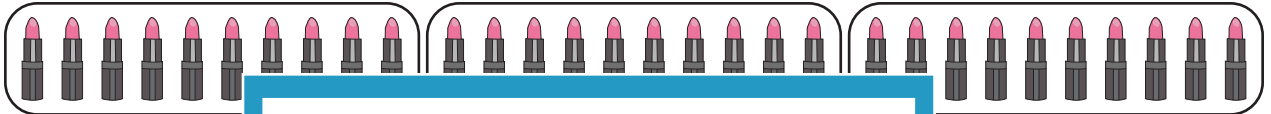


a)  $20 \div 4$

b)  $24 \div 2$

c)  $20 \div 2$


2)



a)  $30 \div 5$

$\div 10$

3)



a)  $12 \div 3$

$\div 3$

4)



a)  $18 \div 3$

$\div 2$

5)




a)  $32 \div 8$

b)  $33 \div 3$

c)  $36 \div 4$

6)



a)  $18 \div 3$

b)  $21 \div 7$

c)  $21 \div 3$

PREVIEW

Gain complete access to the largest  
collection of worksheets in all subjects!

Members, please  
log in to  
download this  
worksheet.

Not a member?  
Please sign up to  
gain complete  
access.

[www.mathworksheets4kids.com](http://www.mathworksheets4kids.com)