


## Division Models

Choose the division equation that describes each model.

1)

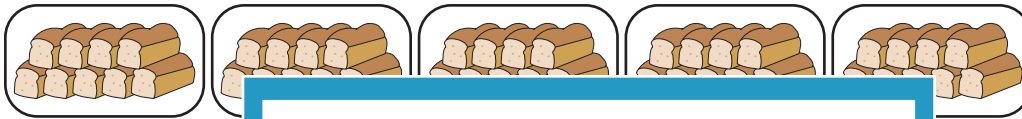


a)  $16 \div 2$

b)  $30 \div 4$

c)  $30 \div 5$

2)



a)  $36 \div 3$

$\div 7$

3)



a)  $36 \div 6$

$\div 2$

4)



a)  $20 \div 10$

$\div 7$

5)

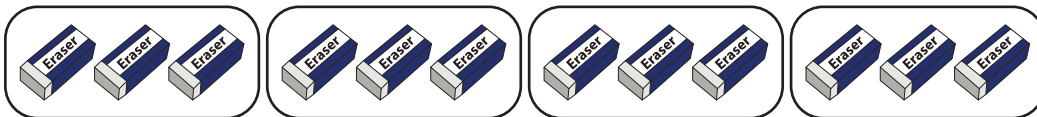


a)  $18 \div 9$

b)  $16 \div 8$

c)  $16 \div 4$

6)



a)  $12 \div 3$

b)  $28 \div 7$

c)  $12 \div 2$

# PREVIEW

Gain complete access to the largest collection of worksheets in all subjects!

Members, please log in to download this worksheet.

Not a member? Please sign up to gain complete access.

[www.mathworksheets4kids.com](http://www.mathworksheets4kids.com)