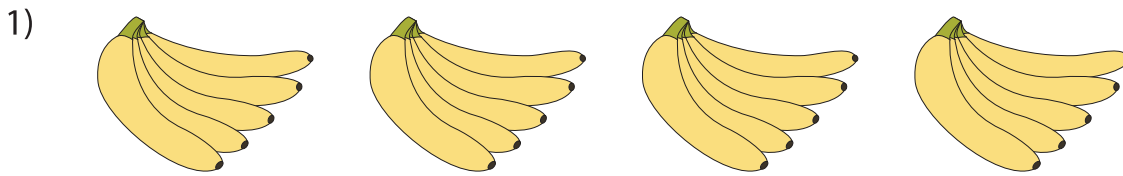
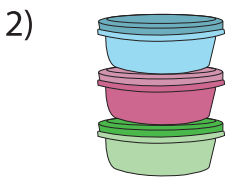



Complete the division equation that describes each model.




$$\square \div 5 = 4$$



9



42



8

$$8 \div 4 = \square$$



$$10 \div \square = 5$$

PREVIEW

Gain complete access to the largest collection of worksheets in all subjects!

Members, please log in to download this worksheet.

Not a member? Please sign up to gain complete access.

www.mathworksheets4kids.com