


Complete the division equation that describes each model.

1)



$$6 \div \square = 3$$

2)



PREVIEW


Gain complete access to the largest
collection of worksheets in all subjects!

Members, please
log in to
download this
worksheet.


Not a member?
Please sign up to
gain complete
access.

www.mathworksheets4kids.com

3)



40




4)



$$15 \div \square = 5$$

5)



$$\square \div 8 = 7$$