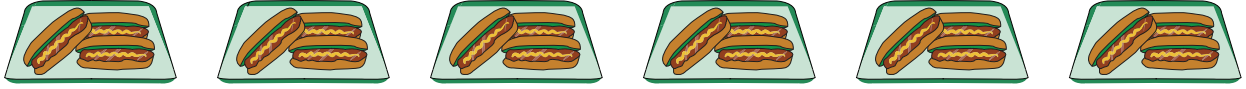


Division Models


Complete the division equation that describes each model.

1)



$$18 \div 3 = \square$$

2)



PREVIEW

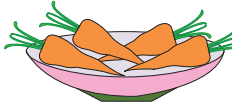
Gain complete access to the largest collection of worksheets in all subjects!

Members, please log in to download this worksheet.

Not a member? Please sign up to gain complete access.

www.mathworksheets4kids.com


3)



16



4)



$$45 \div 9 = \square$$



5)



$$\square \div 7 = 3$$