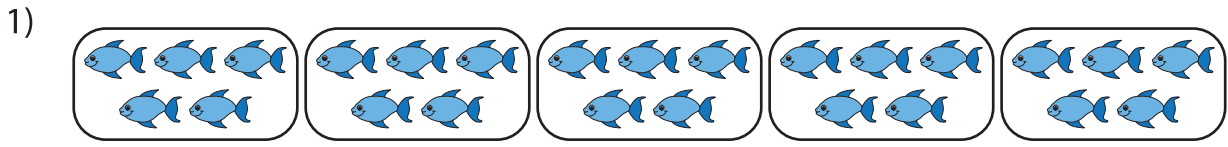



# Division Models

A) Write the division sentence that describes each model.



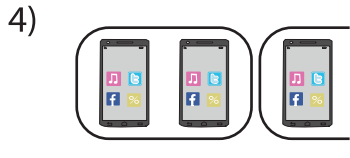
\_\_\_\_\_ ÷ \_\_\_\_\_ = \_\_\_\_\_



\_\_\_\_\_ ÷ \_\_\_\_\_ = \_\_\_\_\_



\_\_\_\_\_ ÷ \_\_\_\_\_ = \_\_\_\_\_



\_\_\_\_\_ ÷ \_\_\_\_\_ = \_\_\_\_\_

B) Draw equal groups

1)  $14 \div 7 =$  \_\_\_\_\_

2)  $27 \div 9 =$  \_\_\_\_\_

## PREVIEW

Gain complete access to the largest collection of worksheets in all subjects!

Members, please log in to download this worksheet.

Not a member? Please sign up to gain complete access.

[www.mathworksheets4kids.com](http://www.mathworksheets4kids.com)