


Name : _____

Division Table - 16



$$16 \div 16 =$$

$$32 \div 16 =$$

PREVIEW

Gain complete access to the largest collection of worksheets in all subjects!

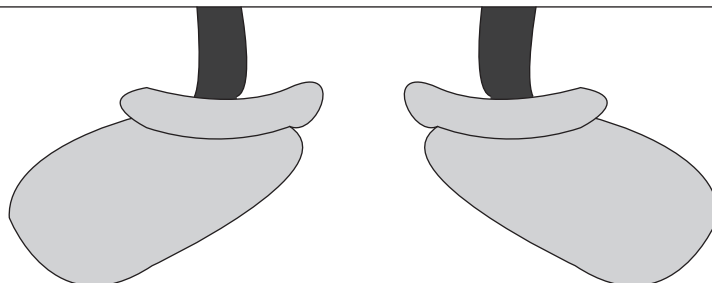
Members, please log in to download this worksheet.

Not a member? Please sign up to gain complete access.

www.mathworksheets4kids.com

$$176 \div 16 =$$


$$192 \div 16 =$$



Name : _____

Answer key

Division Table - 16



16

16

$$16 \div 16 = 1$$

$$32 \div 16 = 2$$

PREVIEW

Gain complete access to the largest collection of worksheets in all subjects!

Members, please log in to download this worksheet.

Not a member? Please sign up to gain complete access.

www.mathworksheets4kids.com

$$176 \div 16 = 11$$

$$192 \div 16 = 12$$

