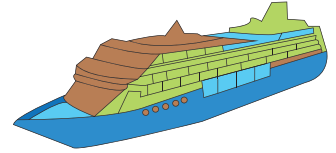


Name : _____

Division

with remainder: S3

- 1) A small cruise liner employs 77 crew members. If 3 members share a cabin each, how many cabins are required to accommodate the crew? How many more crew members remain to be lodged?



- 2) Grace uses 66 glass-contained candles as centerpieces for a wedding reception. If _____ centerpieces will each _____ table be decorated _____ throughout being placed?


PREVIEW

Gain complete access to the largest collection of worksheets in all subjects!

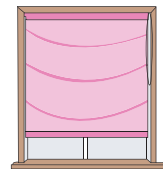
Members, please log in to download this worksheet.

Not a member? Please sign up to gain complete access.

www.mathworksheets4kids.com



- 3) Amarise bought _____ house. How many _____ windows of her _____ how many remain unused?



- 4) Mrs. Fisher buys _____ s to be distributed _____ equally among _____ e distributed to each _____ grandchild? How _____



- 5) Ms. Stevens has 34 photo frames that need to be spread equally across the portico, foyer, and hall of her house. How many photo frames were put up in each of the three areas of the house? How many remain to be hung?