

Name : \_\_\_\_\_

## Division

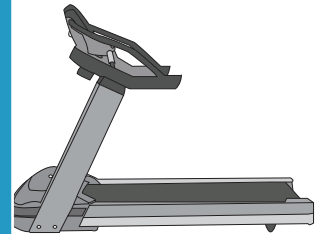
without remainder: S1

- 1) Julia's wardrobe has a total of 36 pieces of clothing. If they are arranged equally in three shelves, how many pieces of clothing will be found in each shelf?



\_\_\_\_\_

- 2) A unisex gym has a total stock of 55 treadmills. If they are arranged in 5 rows, how many treadmills



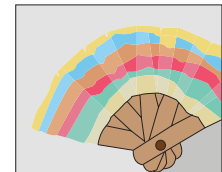
\_\_\_\_\_

- 3) Kathleen uses 48 Popsicle sticks to make 6 paper airplanes. How many paper airplanes can she make with 120 Popsicle sticks?

Gain complete access to the largest collection of worksheets in all subjects!


Members, please log in to download this worksheet.

Not a member? Please sign up to gain complete access.



\_\_\_\_\_

- 4) Miranda baked 12 cakes. If 6 plates, how many cakes are arranged in each plate?



\_\_\_\_\_

- 5) Delbert invests a total of \$54 in the shares of XYZ company. If he has bought 6 shares from the company, how much is each share worth?



\_\_\_\_\_