


Name : _____

Division

without remainder: S3

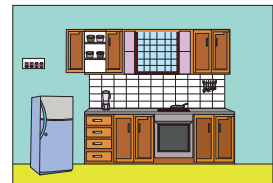
- 1) A recipe calls for 80 pounds of apples to prepare 8 gallons of hard cider. How many pounds of apples is required to make one gallon of hard cider?




- 2) The HQ of a company places an order for 99 artificial Christmas trees to be distributed equally to 9 office locations. How many Christmas trees will each office location receive?



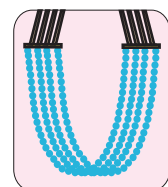
- 3) Joanne has 4 glass cabinets. How many racks does each glass cabinet have?



- 4) Eric took part in a hot dog eating contest. He ate 8 hot dogs in 8 minutes. How many hot dogs did he eat per minute?



- 5) Rebecca used 84 acrylic beads to make a multistrand necklace for her daughter. If the necklace has four equal strands in all, how many beads does each strand hold?



PREVIEW

Gain complete access to the largest collection of worksheets in all subjects!

Members, please log in to download this worksheet.

Not a member? Please sign up to gain complete access.

www.mathworksheets4kids.com