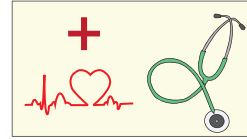


Name : _____

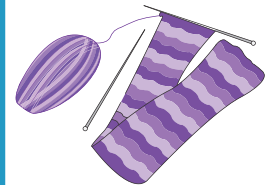
Division

3-digit by 2-digit: S3

- 1) In 2015, Madeline was scheduled to visit the doctor for a routine check up on the 1st of every month. If she spent a total of \$300 towards doctor's fee that year, how much was she charged for each visit?



- 2) Chloe, a tailor is given 112 yards of fabric to make a total of 28 capes for a school Halloween event. How many yards of fabric does she need to make one cape?



PREVIEW

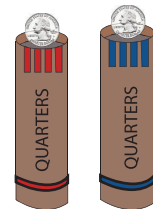
Gain complete access to the largest collection of worksheets in all subjects!

Members, please log in to download this worksheet.

Not a member? Please sign up to gain complete access.

www.mathworksheets4kids.com

- 3) Erica has quartered a \$10 bill into 4 equal parts. How many coin wrappers does she need to hold up to \$10 worth of quarters?



- 4) A concrete mixer truck has 12 drums. If each drum can hold 5 gallons of concrete, how many gallons of concrete will be transferred into the drums?



- 5) The car parking lot at a theater made a total collection of \$979 on Sunday night. If each car owner was charged \$11, how many cars were stationed in the parking lot?