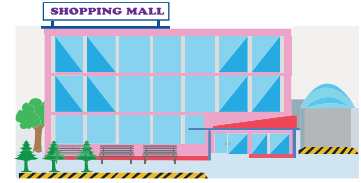


Name : \_\_\_\_\_

## Division

Sheet 3

- 1) The TWX mall has a total of 40 shops equally spread over 4 levels. How many shops are located on each level?



\_\_\_\_\_

- 2) Reese places an order for 48 half-litre water bottles. They arrive in a total of 6 cartons. How many bottles are in each carton?



\_\_\_\_\_

- 3) A weekend theater performance has 5 groups for an audience of 100. If they are split into 5 groups, how many people are in each group?

Gain complete access to the largest collection of worksheets in all subjects!


Members, please log in to download this worksheet.

Not a member? Please sign up to gain complete access.




\_\_\_\_\_

- 4) Layla and eight friends went to the carousel at Central Park. If they paid \$27 in total, how much did each person pay?



\_\_\_\_\_

- 5) A small hotel in New Jersey has a total of 28 slot machines. If they are arranged in 7 columns, how many slot machines can you find in each row?



\_\_\_\_\_