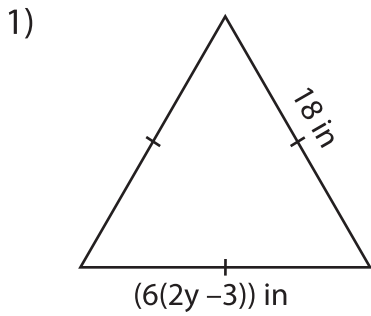
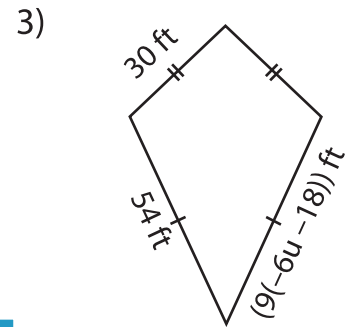
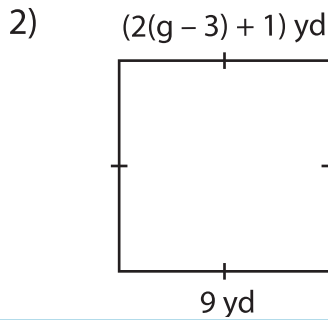


Multi-Step Equations: Shapes

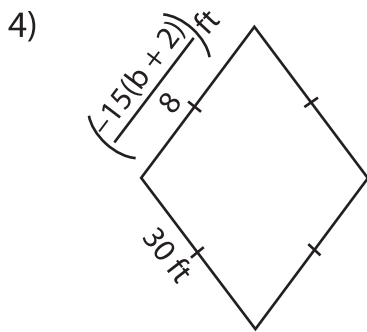
Find the unknown value given in each shape.



$y =$ _____



$u =$ _____



$b =$ _____

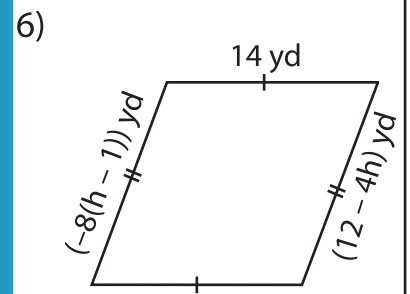
PREVIEW

Gain complete access to the largest collection of worksheets in all subjects!

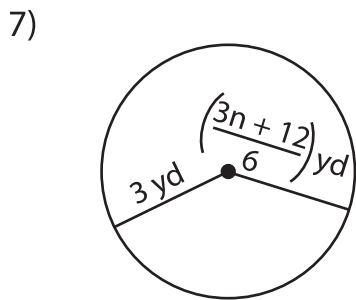
Members, please log in to download this worksheet.

Not a member? Please sign up to gain complete access.

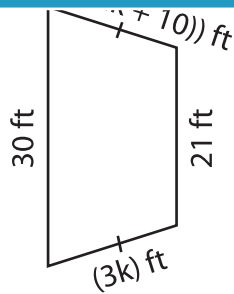
www.mathworksheets4kids.com



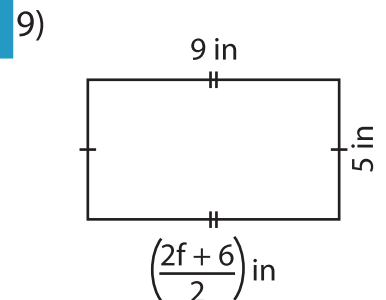
$h =$ _____



$n =$ _____



$k =$ _____



$f =$ _____