

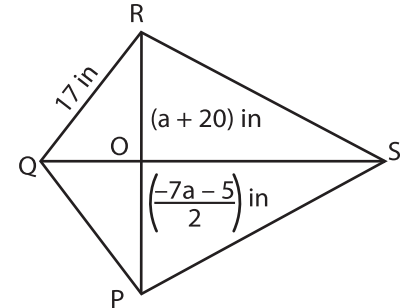
Name : _____

Multi-Step Equations: Shapes

Type 3: S3

Solve each problem.

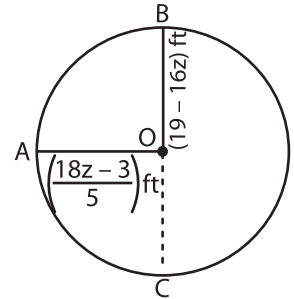
- 1) If QS bisects PR, find the value of a.



a = _____

- 2) O is the centre of the circle. Find the value of z and the diameter AC.

is, find the value of

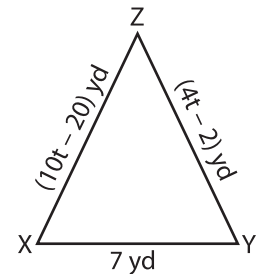


z = _____

- 3) XYZ is an isosceles triangle. Find the value of t.

Gain complete access to the largest collection of worksheets in all subjects!

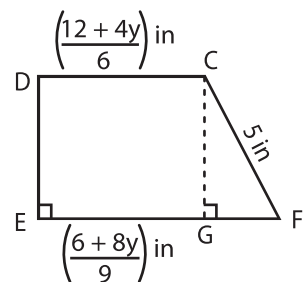
value of t.



t = _____

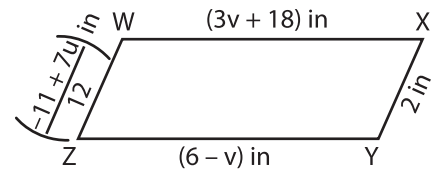
- 4) In the right trapezoid DEFG, find the value of y.

vertex C to the line FE.



y = _____

- 5) In the parallelogram WXYZ, the opposite sides are equal. Find the value of u and v.



u = _____ ; v = _____

Members, please log in to download this worksheet.

Not a member? Please sign up to gain complete access.

www.mathworksheets4kids.com