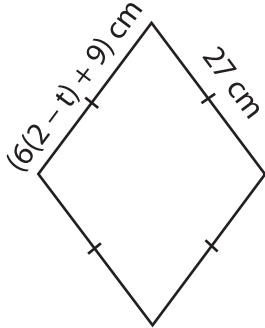


**Multi-Step Equations: Shapes**

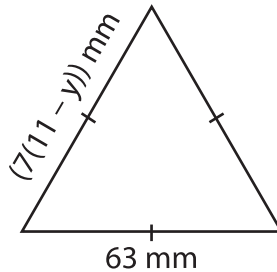
Find the unknown value given in each shape.

1)

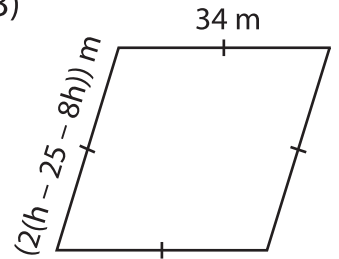


$t =$  \_\_\_\_\_

2)

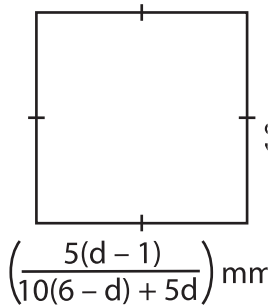


3)



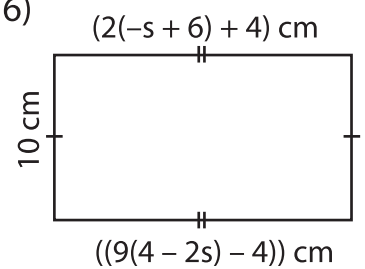
$h =$  \_\_\_\_\_

4)



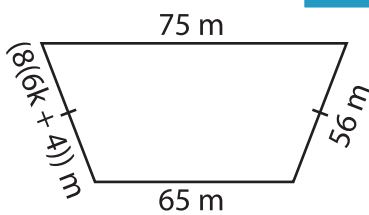
$d =$  \_\_\_\_\_

6)

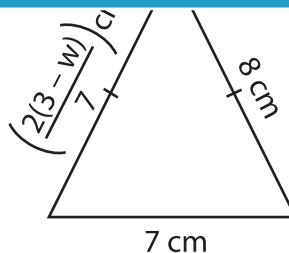


$s =$  \_\_\_\_\_

7)

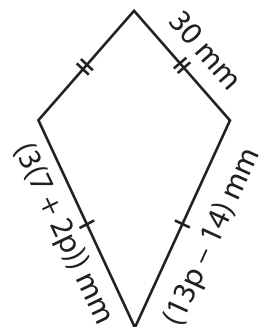


$k =$  \_\_\_\_\_



$w =$  \_\_\_\_\_

9)



$p =$  \_\_\_\_\_

**PREVIEW**

Gain complete access to the largest collection of worksheets in all subjects!

Members, please log in to download this worksheet.

Not a member? Please sign up to gain complete access.

[www.mathworksheets4kids.com](http://www.mathworksheets4kids.com)