

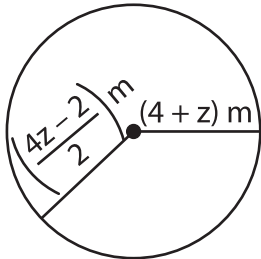
Name : _____

Multi-Step Equations: Shapes

Type 1: S5

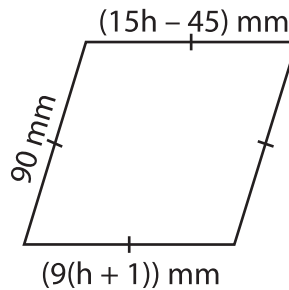
Find the unknown value given in each shape.

1)

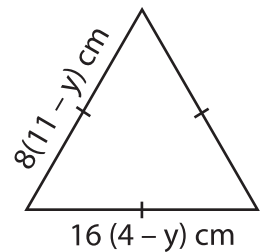


$z =$ _____

2)

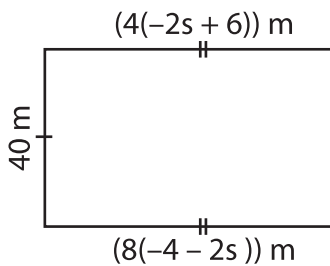


3)



$y =$ _____

4)



$s =$ _____

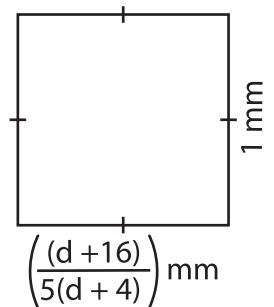
Gain complete access to the largest collection of worksheets in all subjects!

Members, please log in to download this worksheet.

Not a member? Please sign up to gain complete access.

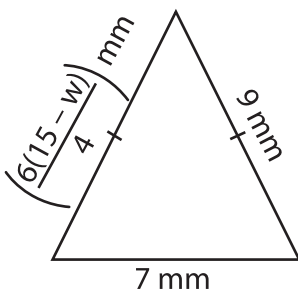
www.mathworksheets4kids.com

6)

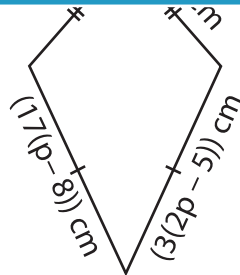


$d =$ _____

7)

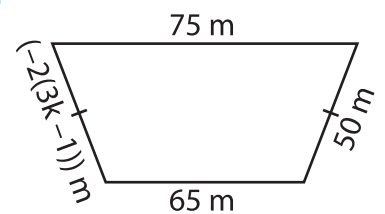


$w =$ _____



$p =$ _____

9)



$k =$ _____