

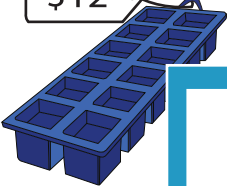




Find the cost of the objects.

1)   $\$38$  +   $k$  =  $\$70$ ;  $k =$  \_\_\_\_\_

2)   $\$12$  +   $n$  = \_\_\_\_\_

3)   $q$  = \_\_\_\_\_

4)   $r$  = \_\_\_\_\_

5)   $p$  -  =  $\$56$ ;  $p =$  \_\_\_\_\_

6)   $s$  -   $\$14$  =  $\$4$ ;  $s =$  \_\_\_\_\_

**PREVIEW**

Gain complete access to the largest collection of worksheets in all subjects!

Members, please log in to download this worksheet.

Not a member? Please sign up to gain complete access.

[www.mathworksheets4kids.com](http://www.mathworksheets4kids.com)