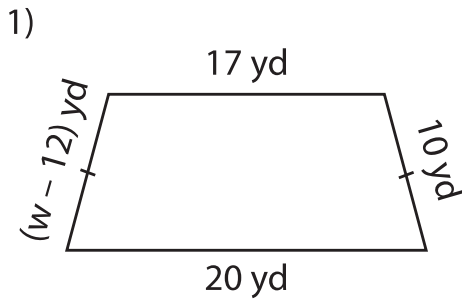


Name : _____

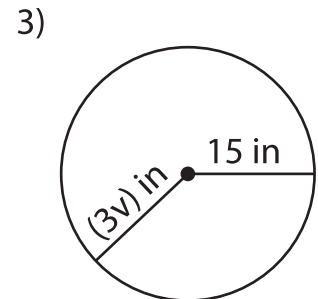
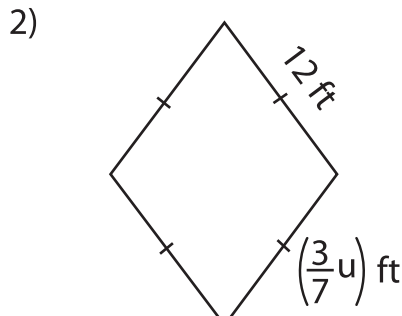
One-Step Equations: Shapes

Type 1: S3

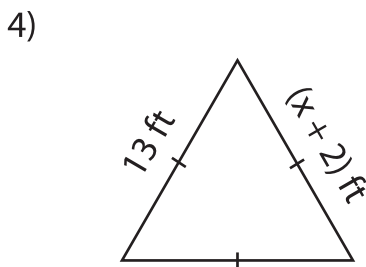
Find the unknown value given in each shape.



$w =$ _____



$v =$ _____



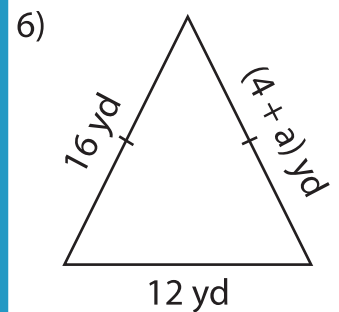
$x =$ _____

Gain complete access to the largest collection of worksheets in all subjects!

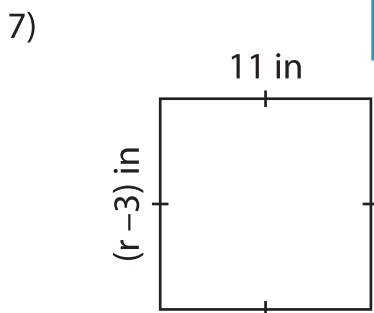
Members, please log in to download this worksheet.

Not a member? Please sign up to gain complete access.

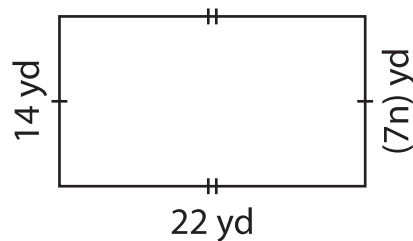
www.mathworksheets4kids.com



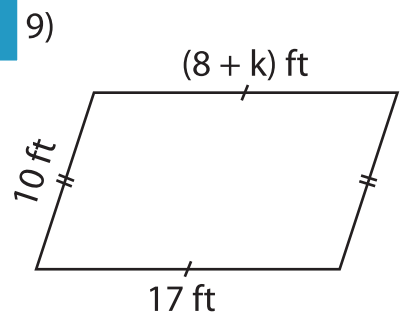
$a =$ _____



$r =$ _____



$n =$ _____



$k =$ _____