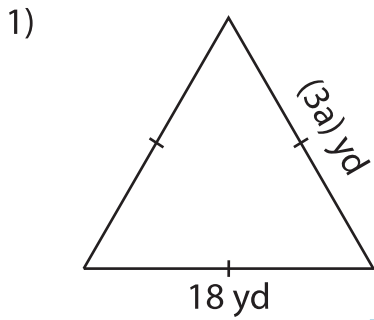
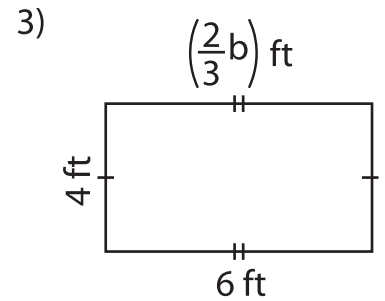
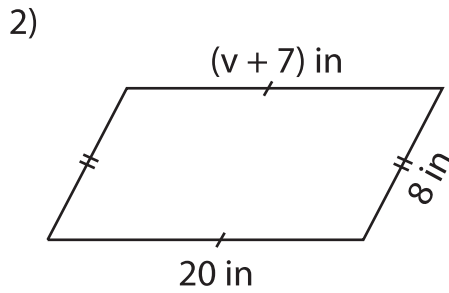


**One-Step Equations: Shapes**

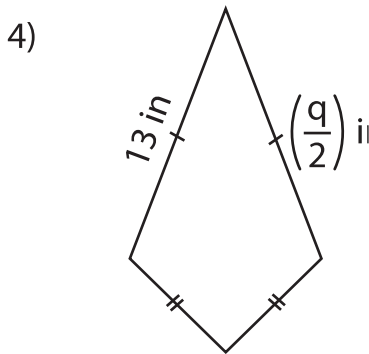
Find the unknown value given in each shape.



$a =$  \_\_\_\_\_



$b =$  \_\_\_\_\_



$q =$  \_\_\_\_\_

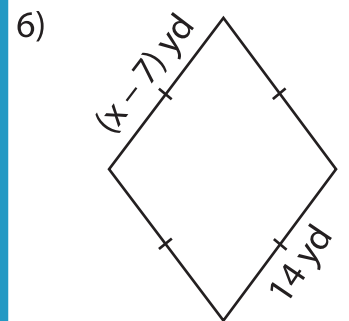
**PREVIEW**

Gain complete access to the largest collection of worksheets in all subjects!

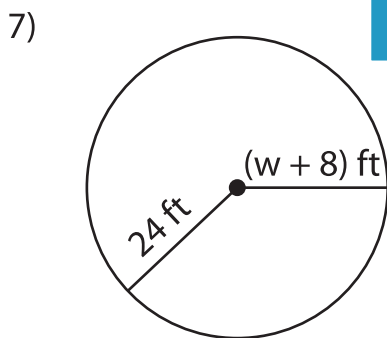
Members, please log in to download this worksheet.

Not a member? Please sign up to gain complete access.

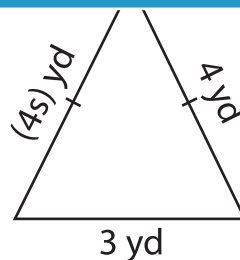
[www.mathworksheets4kids.com](http://www.mathworksheets4kids.com)



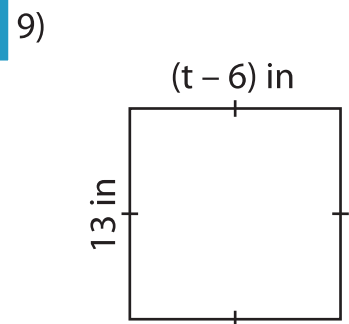
$x =$  \_\_\_\_\_



$w =$  \_\_\_\_\_



$s =$  \_\_\_\_\_



$t =$  \_\_\_\_\_