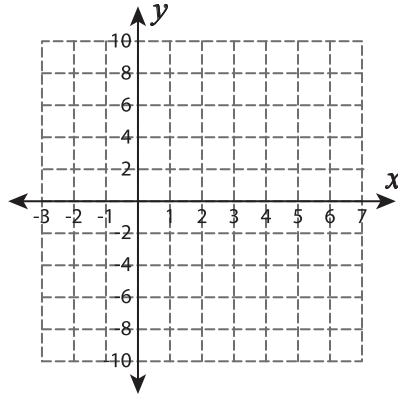


Name : _____

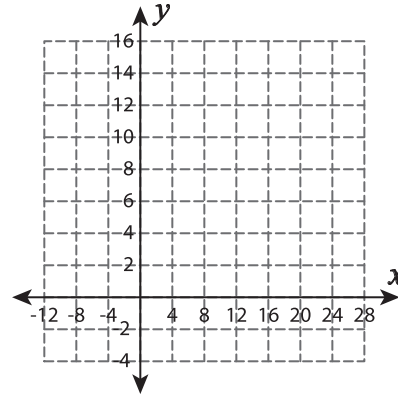
Systems of Equations - Graphing

Graph each system of equations and find the solution.

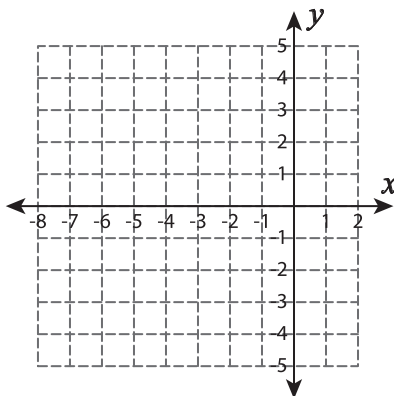
1) $y = 6 - 2x$; $y = -4x + 16$



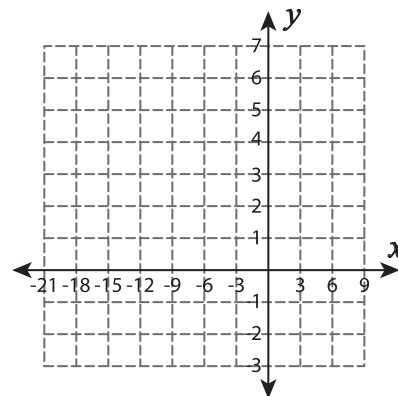
2) $y = \frac{1}{4}x + 8$; $x = 8$



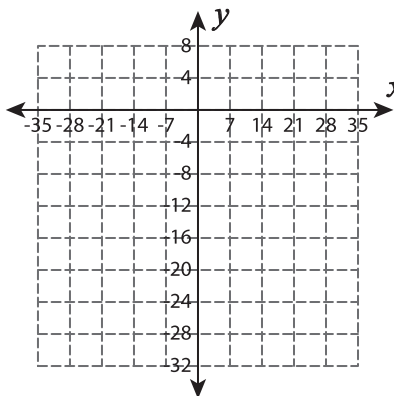
3) $y = x + 7$; $y = -35 - 5x$



4) $y = -\frac{1}{3}x + 3$; $y = -\frac{2}{3}x$



5) $y = -\frac{2}{7}x - 18$; $y = 4x - 48$



6) $y = 2x$; $y = 2 + 3x$

