

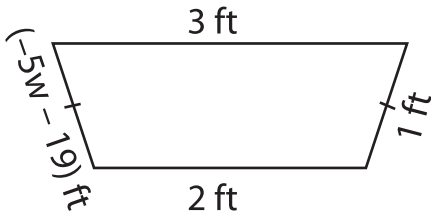
Name: \_\_\_\_\_

## Two-Step Equations: Shapes

Type 1: S2

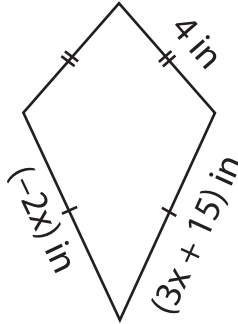
Find the unknown value given in each shape.

1)

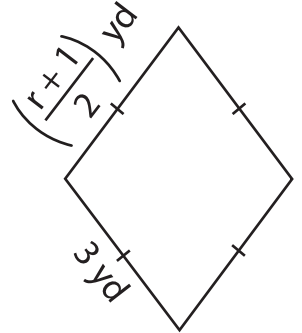


$w =$  \_\_\_\_\_

2)

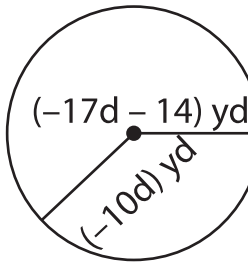


3)



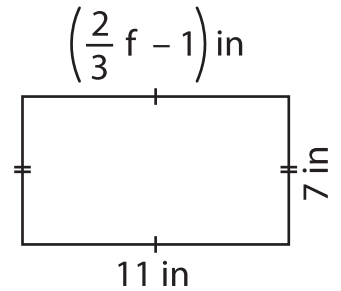
$r =$  \_\_\_\_\_

4)



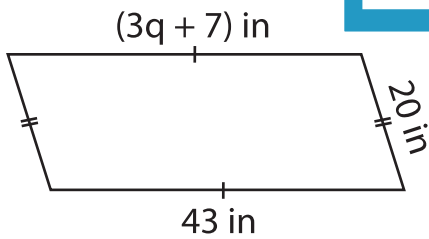
$d =$  \_\_\_\_\_

5)



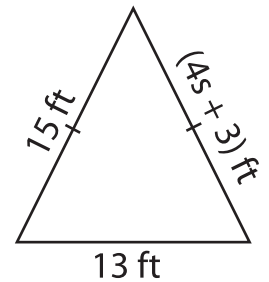
$f =$  \_\_\_\_\_

7)



$q =$  \_\_\_\_\_

9)



$s =$  \_\_\_\_\_

# PREVIEW

Gain complete access to the largest collection of worksheets in all subjects!

Members, please log in to download this worksheet.

Not a member? Please sign up to gain complete access.

www.mathworksheets4kids.com