

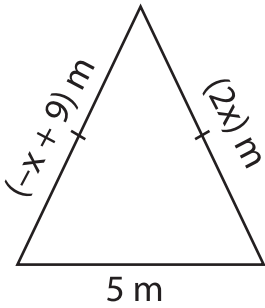
Name : _____

Two-Step Equations: Shapes

Type 1: S1

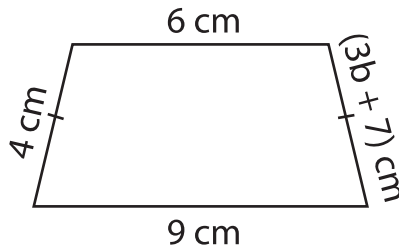
Find the unknown value given in each shape.

1)

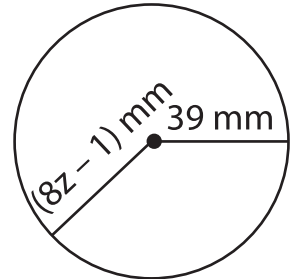


$x =$ _____

2)

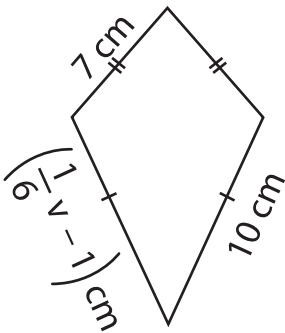


3)



$z =$ _____

4)



$v =$ _____

PREVIEW

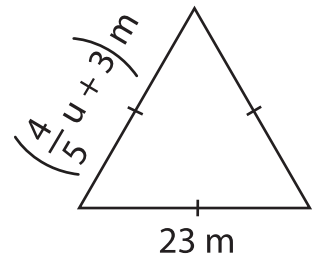
Gain complete access to the largest collection of worksheets in all subjects!

Members, please log in to download this worksheet.

Not a member? Please sign up to gain complete access.

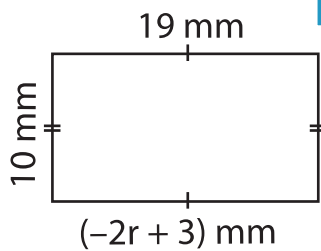
www.mathworksheets4kids.com

5)



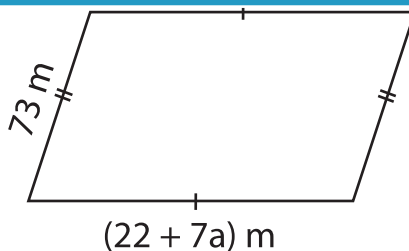
$u =$ _____

7)

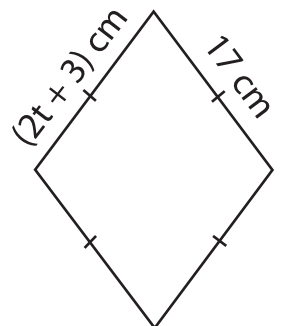


$r =$ _____

8)



$a =$ _____



$t =$ _____