



Name : _____

Compare & Estimate the Count

Sheet 1

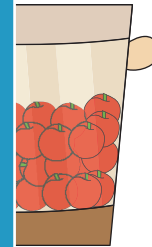
Estimate the number of objects.

1)



About 40 chocolates

2)





About _____

3)



About _____

4)



About 80 bananas

PREVIEW

Gain complete access to the largest collection of worksheets in all subjects!

Members, please log in to download this worksheet.

Not a member? Please sign up to gain complete access.

www.mathworksheets4kids.com