

Name : _____

Compare & Estimate the Count

Sheet 2

Estimate the number of objects.

1)



About 60 marbles

2)



Ab

PREVIEW



Gain complete access to the largest
collection of worksheets in all subjects!

Members, please
log in to
download this
worksheet.

Not a member?
Please sign up to
gain complete
access.

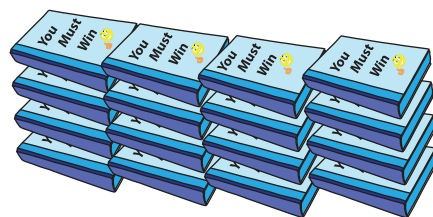
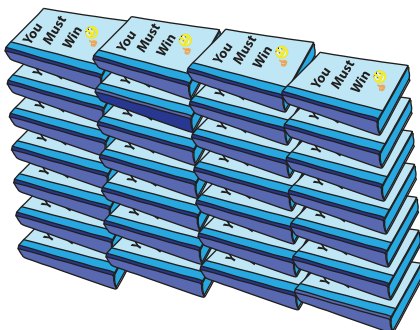
www.mathworksheets4kids.com

3)



Ab

4)



About 30 books