

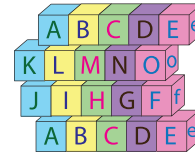
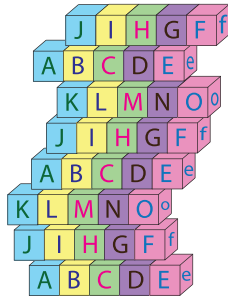
Name : \_\_\_\_\_

## Compare & Estimate the Count

Sheet 3

Estimate the number of objects.

1)



About 50 blocks

2)



Al

# PREVIEW

Gain complete access to the largest collection of worksheets in all subjects!

Members, please log in to download this worksheet.

Not a member? Please sign up to gain complete access.

[www.mathworksheets4kids.com](http://www.mathworksheets4kids.com)





3)



Ab



4)



About 40 pills