



Compare & Estimate the Count

Estimate the number of objects.

1)



About 30 tomatoes

2)

PREVIEW

Gain complete access to the largest collection of worksheets in all subjects!

Members, please log in to download this worksheet.

Not a member? Please sign up to gain complete access.

www.mathworksheets4kids.com




5 coins

3)



All

4)



About 45 soda cans

