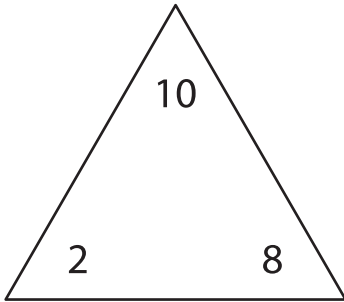


Name : \_\_\_\_\_

## Fact Family - Addition & Subtraction

Each triangle contains the numbers in a fact family. Use the numbers to complete the facts.

1)



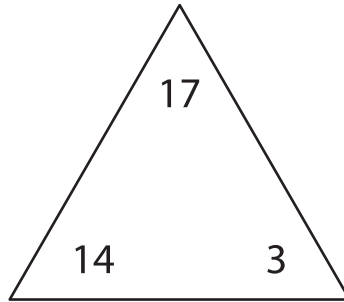
$2 + 8 = \underline{\quad}$

$8 + 2 = \underline{\quad}$

$10 - 8 = \underline{\quad}$

$10 - 2 = \underline{\quad}$

2)



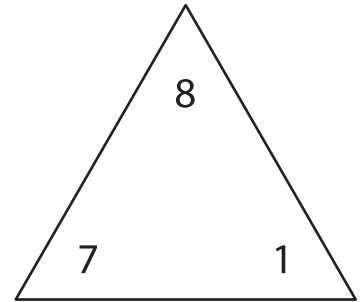
$14 + 3 = \underline{\quad}$

$3 + 14 = \underline{\quad}$

$17 - 3 = \underline{\quad}$

$17 - 14 = \underline{\quad}$

3)



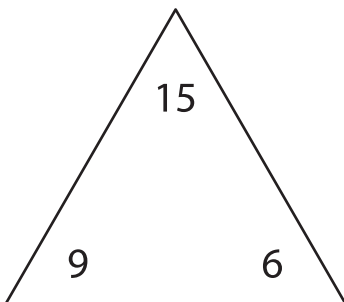
$7 + 1 = \underline{\quad}$

$1 + 7 = \underline{\quad}$

$8 - 1 = \underline{\quad}$

$8 - 7 = \underline{\quad}$

4)



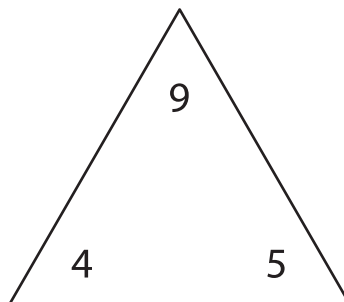
$9 + 6 = \underline{\quad}$

$6 + 9 = \underline{\quad}$

$15 - 9 = \underline{\quad}$

$15 - 6 = \underline{\quad}$

5)



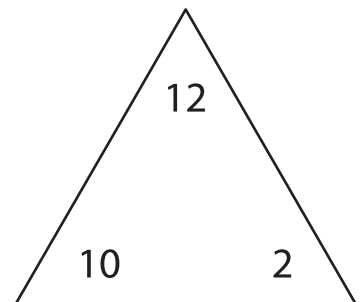
$4 + 5 = \underline{\quad}$

$5 + 4 = \underline{\quad}$

$9 - 5 = \underline{\quad}$

$9 - 4 = \underline{\quad}$

6)



$10 + 2 = \underline{\quad}$

$2 + 10 = \underline{\quad}$

$12 - 2 = \underline{\quad}$

$12 - 10 = \underline{\quad}$