


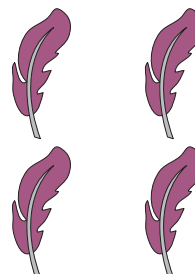
Fact Family - Multiplication & Division

Write a fact family to represent each array.

1)



2)



_____ × _____ = _____

_____ × _____ = _____

_____ ÷ _____ = _____

_____ ÷ _____ = _____



_____ = _____

_____ = _____

_____ = _____

_____ = _____

3)



_____ × _____ = _____

_____ × _____ = _____

_____ ÷ _____ = _____

_____ ÷ _____ = _____

_____ × _____ = _____

_____ × _____ = _____

_____ ÷ _____ = _____

_____ ÷ _____ = _____

PREVIEW

Gain complete access to the largest collection of worksheets in all subjects!

Members, please log in to download this worksheet.

Not a member? Please sign up to gain complete access.

www.mathworksheets4kids.com