

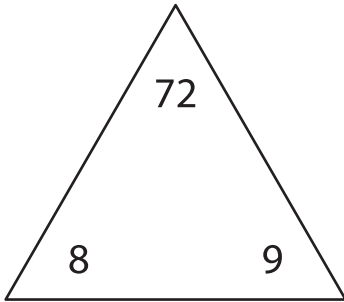
Name : _____

Fact Family - Multiplication & Division

Sheet 1

Each triangle contains the numbers in a fact family. Use the numbers to complete the facts.

1)



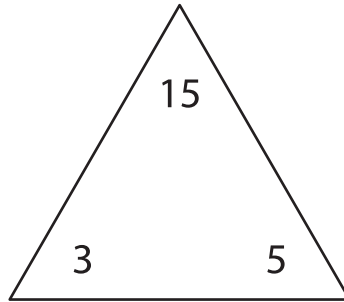
$8 \times 9 = \underline{\quad}$

$9 \times 8 = \underline{\quad}$

$72 \div 9 = \underline{\quad}$

$72 \div 8 = \underline{\quad}$

2)



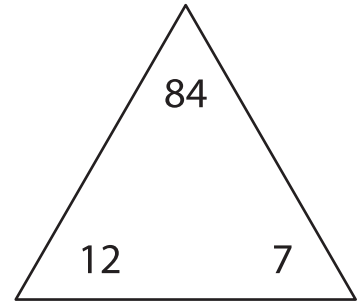
$3 \times 5 = \underline{\quad}$

$5 \times 3 = \underline{\quad}$

$15 \div 5 = \underline{\quad}$

$15 \div 3 = \underline{\quad}$

3)



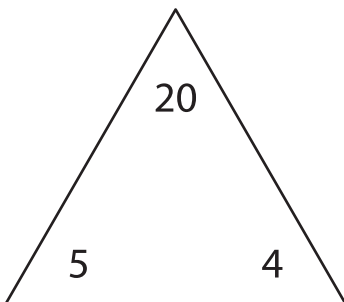
$12 \times 7 = \underline{\quad}$

$7 \times 12 = \underline{\quad}$

$84 \div 7 = \underline{\quad}$

$84 \div 12 = \underline{\quad}$

4)



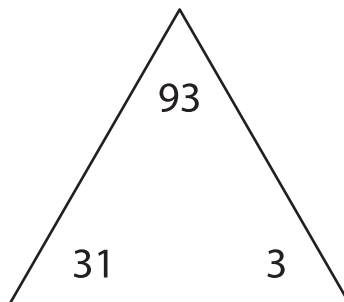
$5 \times 4 = \underline{\quad}$

$4 \times 5 = \underline{\quad}$

$20 \div 4 = \underline{\quad}$

$20 \div 5 = \underline{\quad}$

5)



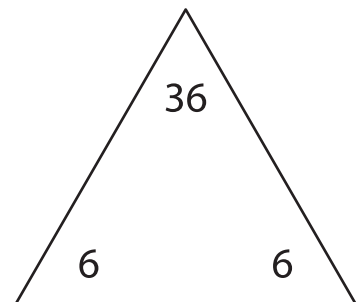
$31 \times 3 = \underline{\quad}$

$3 \times 31 = \underline{\quad}$

$93 \div 3 = \underline{\quad}$

$93 \div 31 = \underline{\quad}$

6)



$6 \times 6 = \underline{\quad}$

$6 \times 6 = \underline{\quad}$

$36 \div 6 = \underline{\quad}$

$36 \div 6 = \underline{\quad}$