

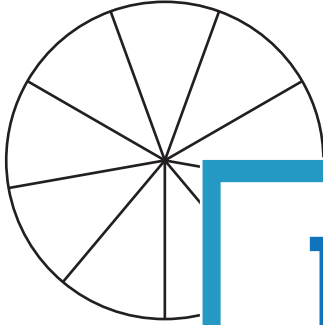
Name : \_\_\_\_\_

## Representing Fractions on Models

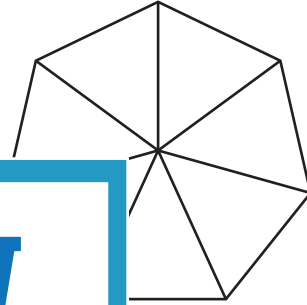
Sheet 2

Color the model to represent each fraction.

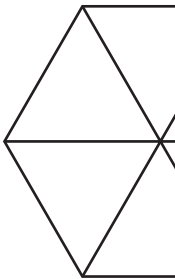
1)  $\frac{7}{9}$



2)  $\frac{5}{7}$



3)  $\frac{4}{6}$




**PREVIEW**  
Gain complete access to the largest  
collection of worksheets in all subjects!

Members, please  
log in to  
download this  
worksheet.

Not a member?  
Please sign up to  
gain complete  
access.

[www.mathworksheets4kids.com](http://www.mathworksheets4kids.com)

5)  $\frac{2}{5}$



4

