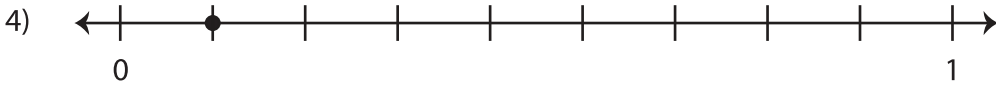
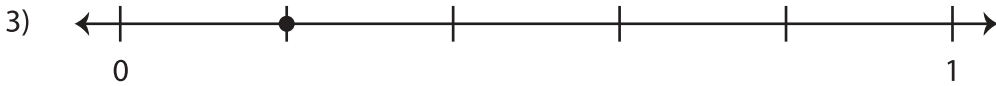
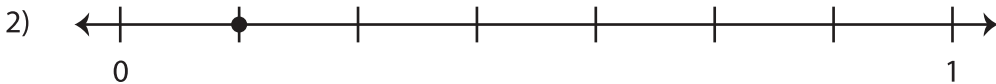


Name : \_\_\_\_\_

## Identifying Unit Fractions

Sheet 1

A) What fraction does the dot on the number line represent?



B) Write the fraction represented by each tape diagram.

