
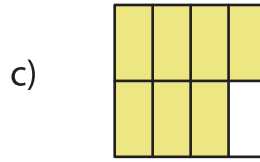
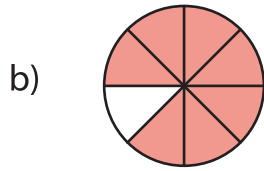
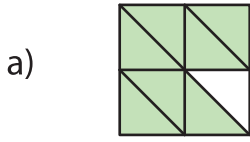
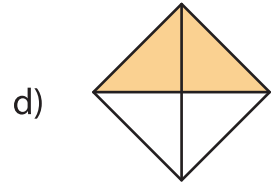
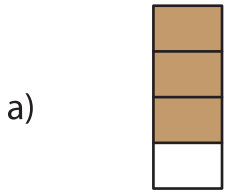


Identifying Fractions

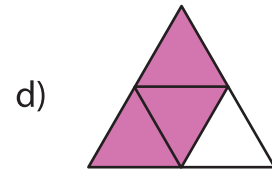
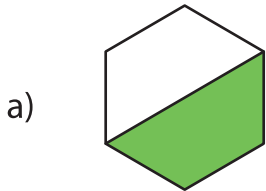
1) Which of the following models does not represent the fraction $\frac{7}{8}$?



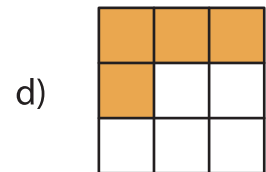
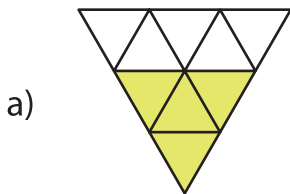
2) Which of the following models represents the fraction $\frac{2}{3}$?



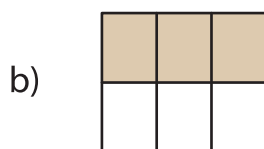
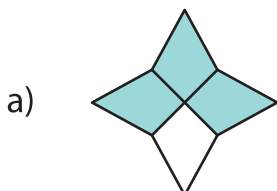
3) Which of the following



4) Which of the following



5) Which of the following models does not represent the fraction $\frac{3}{6}$?



PREVIEW

Gain complete access to the largest collection of worksheets in all subjects!

Members, please log in to download this worksheet.

Not a member? Please sign up to gain complete access.

www.mathworksheets4kids.com