


Name : _____

Missing Numerators and Denominators

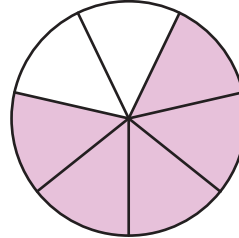
Observe the shaded portions in each fraction model. Fill in the missing numerator or denominator.

1)



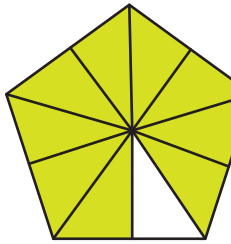
$$\frac{\square}{4}$$

2)



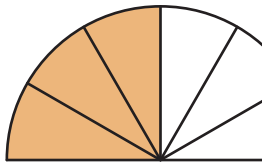
$$\frac{5}{\square}$$

3)




$$\frac{\square}{3}$$

5)



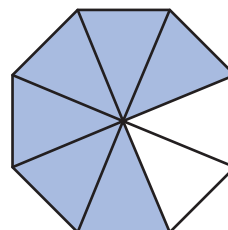
$$\frac{4}{\square}$$

7)



$$\frac{7}{\square}$$

8)



$$\frac{\square}{8}$$

PREVIEW

Gain complete access to the largest collection of worksheets in all subjects!

Members, please log in to download this worksheet.

Not a member? Please sign up to gain complete access.

www.mathworksheets4kids.com