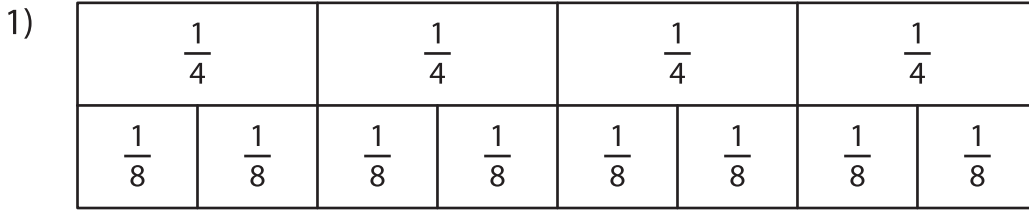
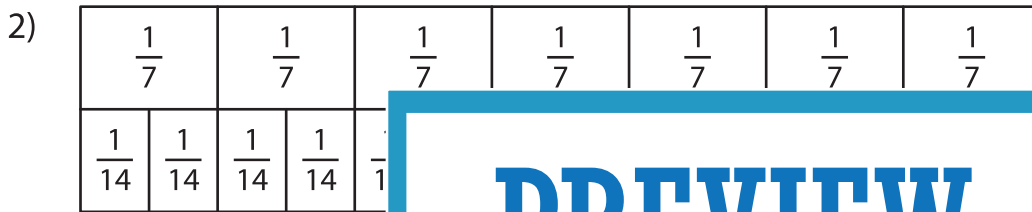


## Comparing Fractions - Bar Model

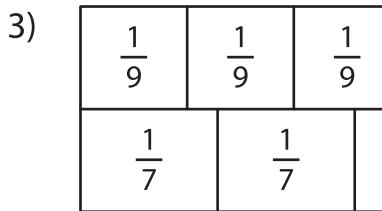
Shade each strip to represent the specified fraction. Compare the fractions using the symbols:  $>$ ,  $<$ , and  $=$ .



$$\frac{2}{4} \quad \bigcirc \quad \frac{3}{8}$$

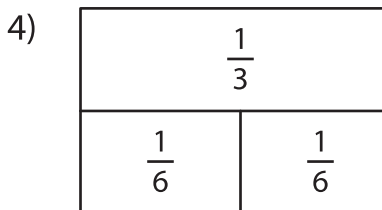


$$\frac{3}{7} \quad \bigcirc \quad \frac{6}{14}$$

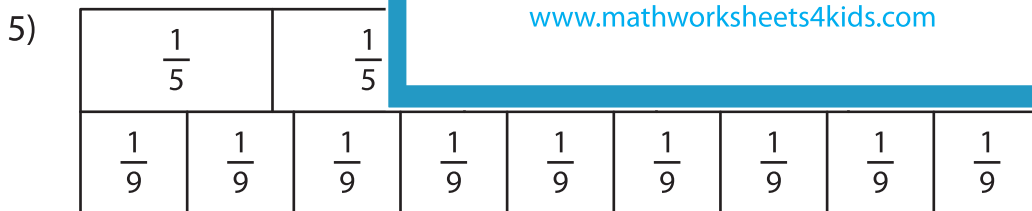


Gain complete access to the largest collection of worksheets in all subjects!

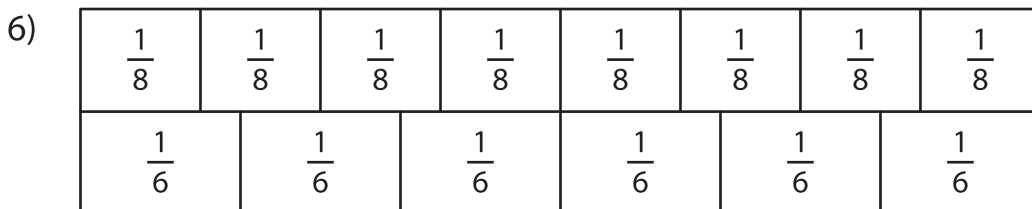
$$\frac{5}{9} \quad \bigcirc \quad \frac{5}{7}$$



$$\frac{1}{3} \quad \bigcirc \quad \frac{2}{6}$$



$$\frac{4}{5} \quad \bigcirc \quad \frac{8}{9}$$



$$\frac{5}{8} \quad \bigcirc \quad \frac{1}{6}$$

# PREVIEW

Members, please log in to download this worksheet.

Not a member? Please sign up to gain complete access.

[www.mathworksheets4kids.com](http://www.mathworksheets4kids.com)