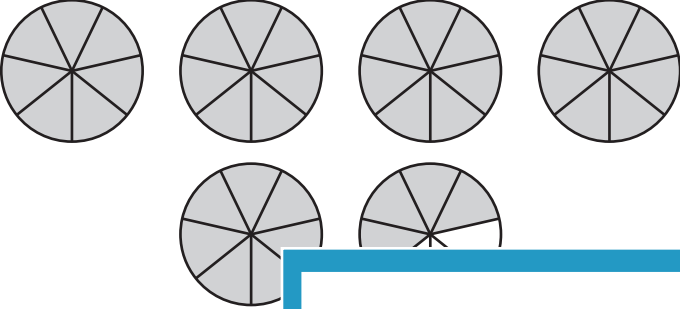
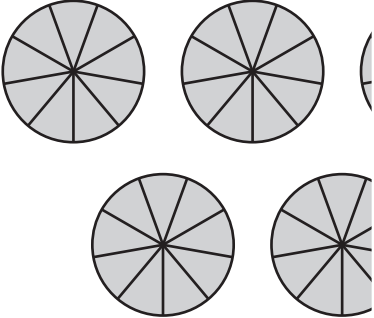
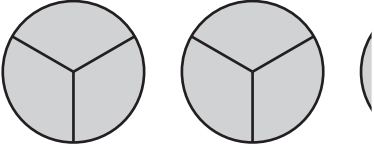
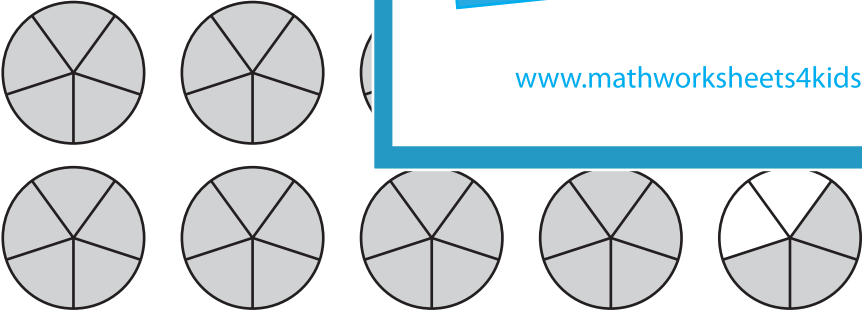
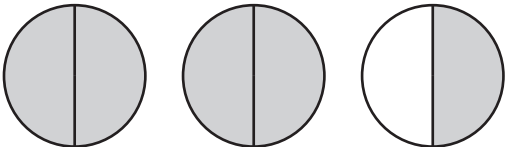


Name : _____

Converting Improper Fractions and Mixed Numbers

Shade the pies to represent the specified fraction or mixed number, and complete the table.

Visual Representation	Improper Fraction	Mixed Number
	$\frac{39}{7}$	
		$8\frac{5}{9}$
		
		$9\frac{3}{5}$
	$\frac{5}{2}$	

PREVIEW

Gain complete access to the largest collection of worksheets in all subjects!

Members, please log in to download this worksheet.

Not a member? Please sign up to gain complete access.

www.mathworksheets4kids.com