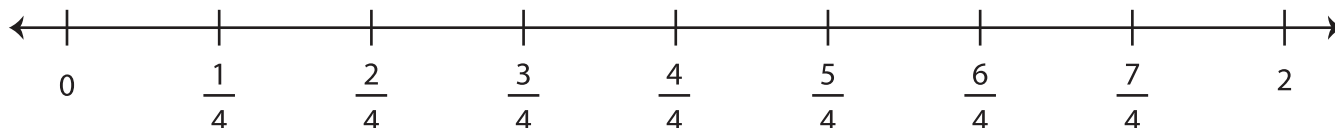
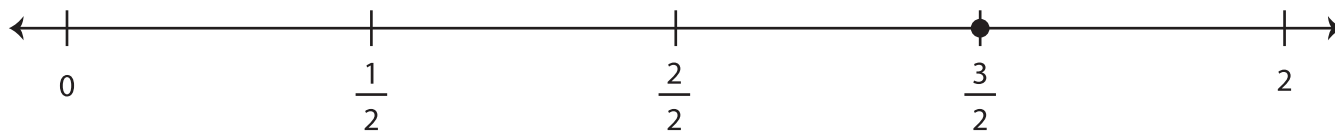


Equivalent Fractions on a Number Line

Find the fraction that is equivalent to each given fraction using the number line.

1) $\frac{3}{2} =$



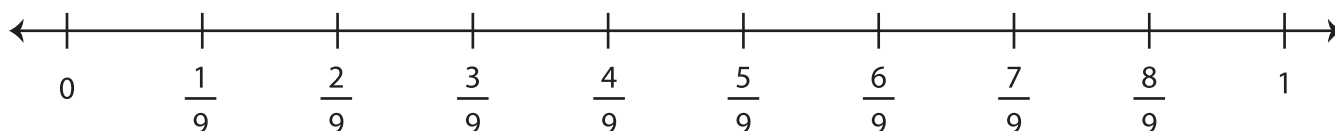
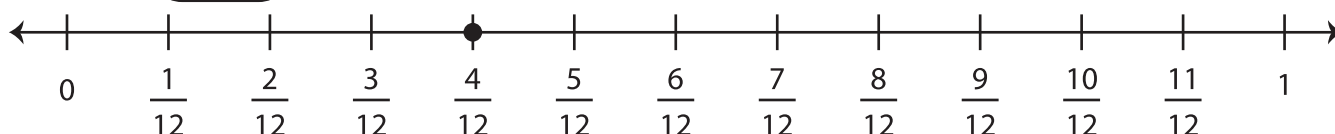
2) $\frac{6}{9} =$



3) $\frac{1}{2} =$



4) $\frac{4}{12} =$



PREVIEW

Gain complete access to the largest collection of worksheets in all subjects!

Members, please log in to download this worksheet.

Not a member? Please sign up to gain complete access.

www.mathworksheets4kids.com