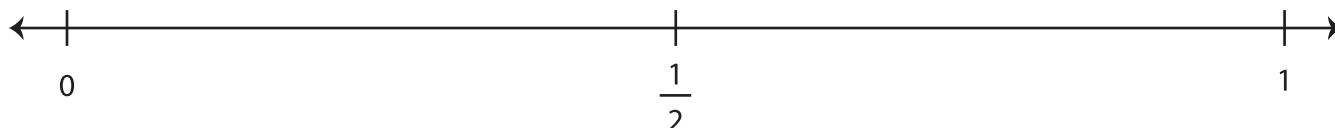
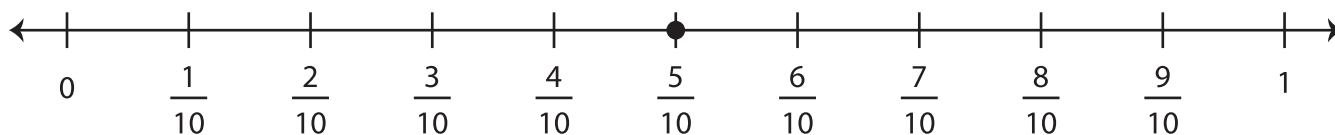


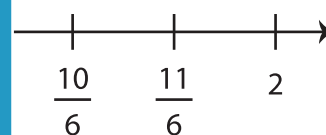
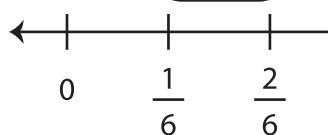
## Equivalent Fractions on a Number Line

Find the fraction that is equivalent to each given fraction using the number line.


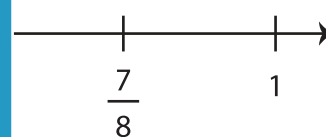

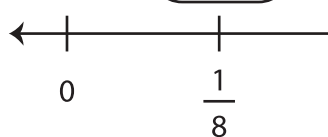
1)  $\frac{5}{10} =$



2)  $\frac{8}{6} =$



3)  $\frac{4}{8} =$



# PREVIEW

Gain complete access to the largest collection of worksheets in all subjects!

Members, please log in to download this worksheet.

Not a member? Please sign up to gain complete access.

[www.mathworksheets4kids.com](http://www.mathworksheets4kids.com)

4)  $\frac{2}{3} =$

