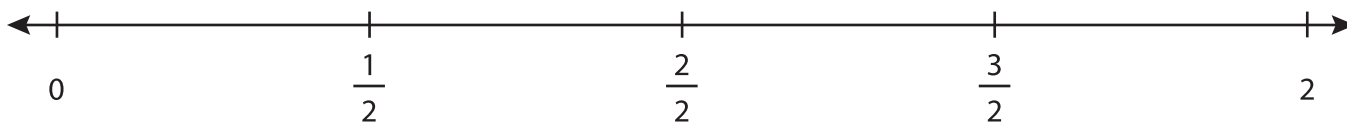


Name : \_\_\_\_\_

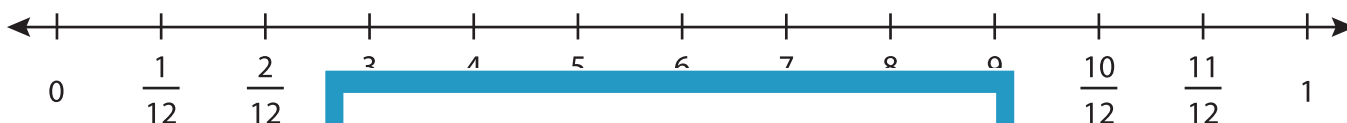
## Equivalent Fractions on a Number Line

Sheet 1

- 1) Find the fraction equivalent to  $\frac{9}{6}$  and plot it on the number line.



- 2) Find the fraction equivalent to  $\frac{2}{3}$  and plot it on the number line.



- 3) Find the fraction equivalent to  $\frac{1}{2}$  and plot it on the number line.



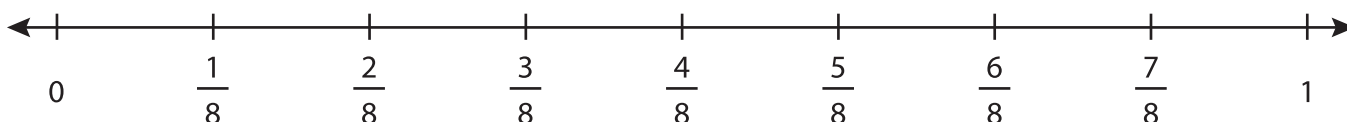
- 4) Find the fraction equivalent to  $\frac{2}{10}$  and plot it on the number line.



- 5) Find the fraction equivalent to  $\frac{3}{5}$  and plot it on the number line.



- 6) Find the fraction equivalent to  $\frac{1}{4}$  and plot it on the number line.



**PREVIEW**

Gain complete access to the largest collection of worksheets in all subjects!

Members, please log in to download this worksheet.

Not a member? Please sign up to gain complete access.

[www.mathworksheets4kids.com](http://www.mathworksheets4kids.com)