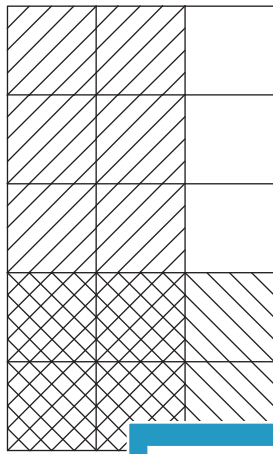


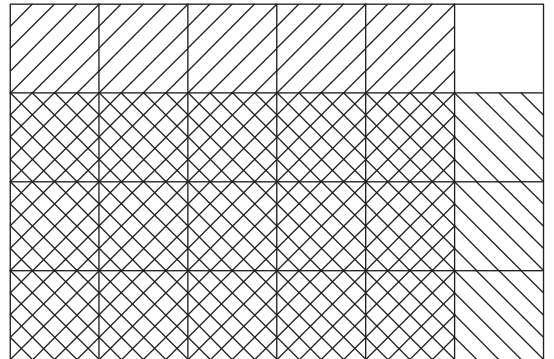
Multiplying Missing Fractions - Area Model

Complete each multiplication equation using the area model.

1)

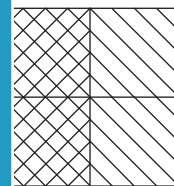
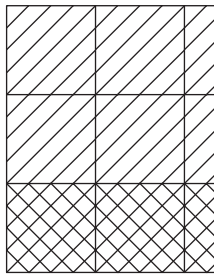


2)



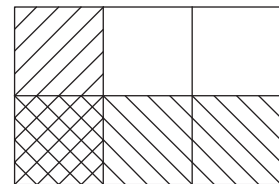
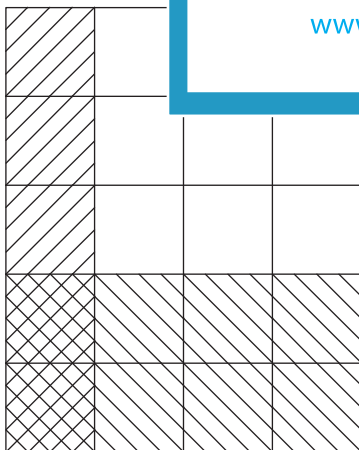
_____ \times $\frac{2}{5}$ = _____ $=$ $\frac{15}{24}$

3)



$\frac{3}{5}$ \times $\frac{1}{3}$ = $\frac{2}{2}$ = $\frac{2}{4}$

5)



$\frac{1}{4}$ \times _____ = $\frac{2}{20}$ $\frac{1}{3}$ \times $\frac{1}{2}$ = _____

PREVIEW

Gain complete access to the largest collection of worksheets in all subjects!

Members, please log in to download this worksheet.

Not a member? Please sign up to gain complete access.

www.mathworksheets4kids.com