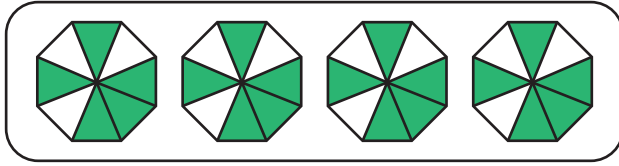


Multiplying Fractions - Models

A) 1)

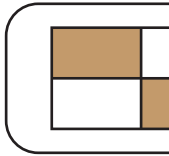


a) How many $\frac{1}{8}$ parts in the model above are shaded?

$$4 \times \frac{5}{8} = \underline{\hspace{2cm}} \times \frac{1}{8}$$

b) $4 \times \frac{5}{8} = \underline{\hspace{2cm}}$

2)



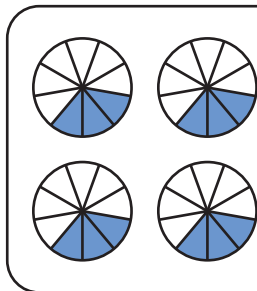
a) How many $\frac{1}{6}$

$$3 \times \frac{3}{6} = \underline{\hspace{2cm}}$$

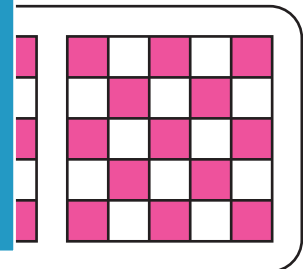
b) $3 \times \frac{3}{6} = \underline{\hspace{2cm}}$

B) Write the multiplic

1)



parts in each model.



PREVIEW

Gain complete access to the largest collection of worksheets in all subjects!

Members, please log in to download this worksheet.

Not a member? Please sign up to gain complete access.

www.mathworksheets4kids.com

C) Which model represents the product $2 \times \frac{2}{4}$?

