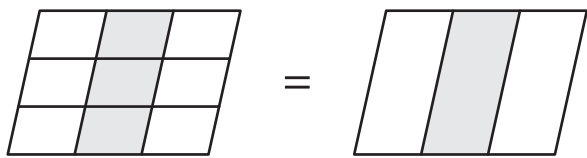


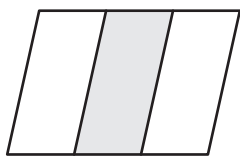
## Simplifying Fractions Using Models

Simplify each fraction using the given models.

1)

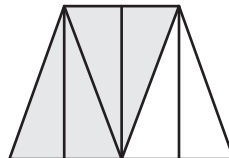


=

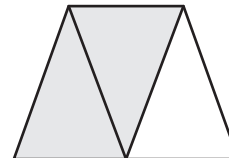


$$\frac{3}{9} = \frac{\square}{\square}$$

2)




=

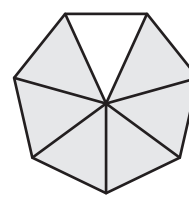


$$= \frac{\square}{\square}$$

3)



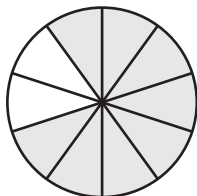
=



$$\frac{6}{12} = \frac{\square}{\square}$$

$$= \frac{\square}{\square}$$

5)



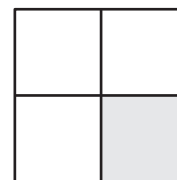
=



$$\frac{8}{10} = \frac{\square}{\square}$$



=



$$\frac{2}{8} = \frac{\square}{\square}$$

# PREVIEW

Gain complete access to the largest collection of worksheets in all subjects!

Members, please log in to download this worksheet.

Not a member? Please sign up to gain complete access.

www.mathworksheets4kids.com