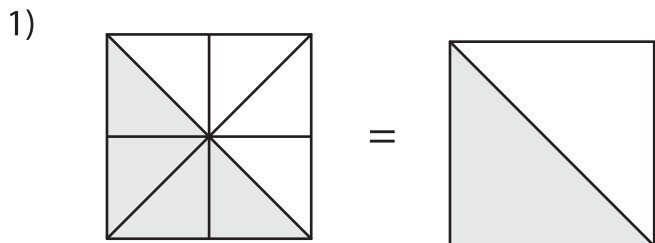
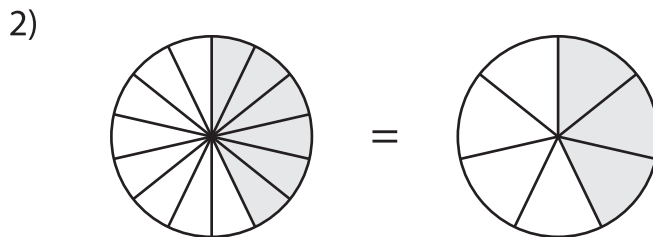


Simplifying Fractions Using Models

Simplify each fraction using the given models.



$$\frac{4}{8} = \frac{\square}{\square}$$



$$= \frac{\square}{\square}$$

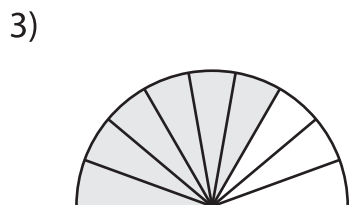
PREVIEW

Gain complete access to the largest
collection of worksheets in all subjects!

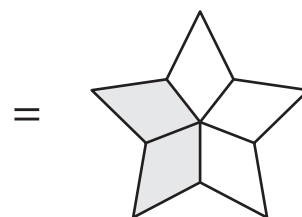
Members, please
log in to
download this
worksheet.

Not a member?
Please sign up to
gain complete
access.

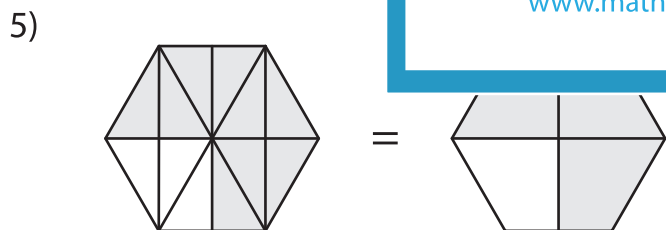
www.mathworksheets4kids.com



$$\frac{6}{9} = \frac{\square}{\square}$$



$$= \frac{\square}{\square}$$



$$\frac{9}{12} = \frac{\square}{\square}$$



$$\frac{3}{6} = \frac{\square}{\square}$$