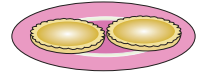


Name : _____

Fraction

T1S1


- 1) Fran baked 12 lemon tarts for her son, Bob. He gobbled up 4 tarts. What fraction of lemon tarts did Bob eat?



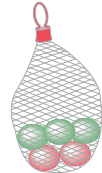
- 2) Gina travels a distance of 7 miles to reach home. The bus ride covers 5 miles. She then walks 2 miles to reach her home. What fraction of miles does Gina travel by bus?



- 3) Anne has 24 pencils in a box. Eighteen pencils have #2 marked on them and the 6 are marked #3. What fraction of pencils are marked #3?



- 4) Dylan has a total of 25 marbles. He gives 5 marbles to his sister, Jane. What fraction of marbles did Jane receive?



- 5) Emily places 15 roses in a beautiful glass vase. It holds 6 yellow roses and 9 red roses. What fraction of roses are red?



- 6) John owns a total of 14 pairs of socks of which 7 pairs are black and the rest are blue. What fraction of pairs of socks are blue?



- 7) Zoe spotted a total of 39 parrots in an aviary at the San Diego Zoo. She counted 18 macaws and 21 cockatoos. What fraction of macaws did Zoe spot at the aviary?

