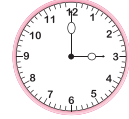


Name : _____


Fraction

T1S2

- 1) Fiona spent 50 minutes to complete her homework. She spent 30 minutes on her math assignment and 20 minutes on her science assignment. What fraction of time did Fiona spend on her math assignment?



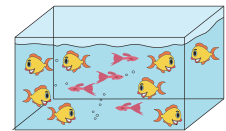
- 2) Sandy empties 21 cookies into a jar. Twelve were vanilla-flavored and 9 were chocolate-flavored. What fraction of cookies were vanilla- flavored?



- 3) Beth cuts a green apple into 8 slices. She gives 3 slices to her brother and 1 slice to her sister, and she keeps the rest for herself. What fraction of the apple did she keep?



- 4) Lily was gifted 10 goldfish at the aquarium. She received 8 goldfish and 4 goldfish from her friends. What fraction of the goldfish were from her friends?



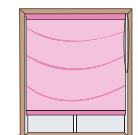
- 5) Twenty-one out of thirty people were invited to a party. Six invitees could not make it. What fraction of the invitees could not make it?



- 6) Hal visited the museum for an entry ticket and \$12 on lunch. What fraction of money did Hal spend on the entry ticket?



- 7) Christie buys 7 yards of fabric to stitch up curtains for her home. Three yards of fabric has prints on it and 4 yards are plain. What fraction of fabric has prints on it?



PREVIEW

Gain complete access to the largest collection of worksheets in all subjects!

Members, please log in to download this worksheet.

Not a member? Please sign up to gain complete access.

www.mathworksheets4kids.com